

Fractions to percentages

Notes and guidance

In this small step, children recap Year 5 learning on equivalent fractions and percentages, using visual representations, before moving on to more abstract methods.

Children use hundred squares and bar models to explore equivalents, for example $\frac{1}{5}$ is the whole split into 5 equal parts and 100% split into 5 equal parts is 20%, so $\frac{1}{5} = 20\%$. They then explore the relationship with non-unit fractions, seeing that if $\frac{1}{4}$ is equal to 25%, then $\frac{3}{4} = 3 \times 25\% = 75\%$. More abstract methods allow children to convert more complex examples such as $\frac{11}{25}$.

They recognise that if they can find an equivalent fraction with a denominator of 100, then they can easily find percentage equivalences. Children explore examples where they are required to multiply (for example, $\frac{9}{20}$) or divide (for example, $\frac{132}{200}$).

Things to look out for

- Children need to be able to fluently find equivalent fractions.
- Children may not be confident with factors of 100, including 20 and 25

Key questions

- What is a percentage?
- If the whole is split into 100 equal parts, then what percentage is _____ parts equivalent to?
- How are percentages and fractions similar/different?
- If you know $\frac{1}{5}$ is equal to 20%, what percentage is $\frac{4}{5}$ equal to?
- How do you find an equivalent fraction?
- How many 20s/25s are there in 100?
- What do you know about the relationship between $\frac{1}{4}$ and $\frac{1}{8}$?

Possible sentence stems

- _____% is equivalent to $\frac{\square}{100}$
- $\frac{\square}{\square}$ is equivalent to $\frac{\square}{100}$ because ...
- The fraction $\frac{\square}{\square}$ is equivalent to _____%.

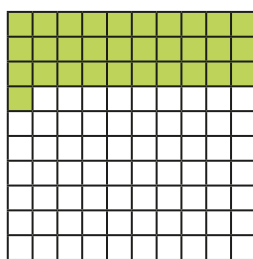
National Curriculum links

- Recall and use equivalences between simple fractions, decimals and percentages, including in different contexts

Fractions to percentages

Key learning

- Max uses a hundred square to convert $\frac{31}{100}$ to a percentage.



$$\frac{31}{100} = 31\%$$

Shade hundred squares to show the fractions.

$$\frac{7}{100}$$


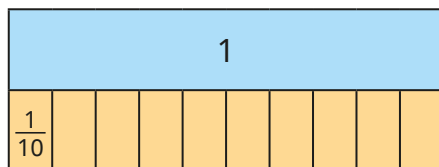
$$\frac{49}{100}$$

$$\frac{96}{100}$$

$$\frac{70}{100}$$

What percentage is shown on each hundred square?

- The bar models show that $\frac{1}{10}$ is equal to 10%.



Use the bar models to complete the statements.

$$\frac{3}{10} = \underline{\hspace{1cm}}\% \quad \frac{9}{10} = \underline{\hspace{1cm}}\% \quad \frac{\square}{100} = 50\% \quad \frac{\square}{\square} = 70\%$$

- Whitney converts $\frac{3}{5}$ to a percentage.

$$\frac{3}{5} \xrightarrow{\times 20} \frac{60}{100} = 60\%$$

Use Whitney's method to convert the fractions to percentages.

$$\frac{3}{4}$$

$$\frac{23}{50}$$

$$\frac{23}{25}$$

$$\frac{13}{20}$$

$$\frac{14}{20}$$

$$\frac{112}{200}$$

- $\frac{2}{5}$ of the people in a stadium have brown hair.

17% of the people have ginger hair.

$\frac{4}{25}$ of the people have black hair.

The rest have blonde hair.

What percentage of the people have blonde hair?

Fractions to percentages

Reasoning and problem solving




I know $\frac{2}{8}$ is equal to $\frac{1}{4}$ and $\frac{1}{4}$ is equal to 25%, so $\frac{2}{8}$ is also equal to 25%.

12.5%

How can you use Ron's facts to work out $\frac{1}{8}$ as a percentage?

What is $\frac{1}{8}$ as a percentage?



Huan thinks that 18% of the grid has been shaded.

Dora thinks that 36% of the grid has been shaded.

Who do you agree with?

Explain your answer.

Dora



In a maths test, Scott answered 58% of the questions correctly.

Nijah answered $\frac{2}{5}$ of the questions incorrectly.

Who answered more questions correctly?

Explain your reasoning.

Nijah



Tiny converts $\frac{13}{25}$ to a percentage.

$$\frac{13}{25} = \frac{13}{100} = 13\%$$

× 4

52%

What mistake has Tiny made?

What is the correct percentage?

